

Tender Souls' Public School

Ring Road Awas vikas, Rudrapur

Summer Vacation Assignment (2019-20)

Ph. 05944-245778

97564-97970

Name - _____

Class -IV

Note :- P.T. M to be held on 21.05.09 (Tue) between 10:00 a.m. to 12:30 p.m.
Holiday homework MUST be submitted on 28th or 29th of June'19.

- Note:** i) Below homework is to be done in A4-ruled sheets and be filed in the RING BINDER.
 ii) Take the required no. of Xerox of the working sheet(s), if necessary.
 iii) Parents to help and supervise the activity of their ward in furnishing the above homework.
 iv) Summer break falls from 21.05.19 (Tue) to 29.06.19 (sat) .

S.No.	Subject	Assignment
1.	English	1. Read the newspaper regularly during your holidays . Cut 5 pictures from old newspaper. Paste them in a chart and give a caption to each picture. 2. Write a letter to your cousin telling him about how you spent your summer vacations this year. 3. Write an article on –“Importance of English Language”. 4. Write a short note on any one person who attained success despite his/her physical disability and also paste the relevant picture.
2.	Hindi	क) अपने मित्र की वाटर पार्क भ्रमण के लिए आमंत्रित करते हुए पत्र लिखें। ख) कल आपका जन्मदिन है। आप अपनी सहेली/दोस्त को अपने जन्मदिन की पार्टी में बुलाना चाहती/चाहते हैं। -संवाद के रूप में लिखिए ग) गर्मियों के मौसम में कई बीमारियाँ होने का डर बना रहता है। इस मौसम में आप स्वयं को स्वस्थ रखने के लिए क्या-क्या सावधानी बरतेंगे? घ) अपने जीवन में आप किस व्यक्ति को अपना आदर्श मानते हैं? और क्यों? संक्षिप्त में लिखें। ङ) घर में आपके माता-पिता आपको किन-किन बातों पर डाँटते हैं तथा किन-किन बातों पर आपकी सरहाना करते हैं? सूची तैयार कीजिए।
3.	Maths	1. Write the name of atleast 20 different objects, with their shapes, you have observed during the summer vacation at different places . 2. Make a calendar for the year 2019 using a chart paper and other necessary materials. 3. Write the squares of the numbers from 1 to 15 and learn them.
4.	Science	1. Draw the facial-expressions according to the following situations:- a) You have a new-born baby-sister. b) You have joined a new school, because your father has moved to another city. c) Your cousin brother is getting married. d) You see a puppy yelling in a pit. e) You see a funny joker. 2. Draw a family tree of your present family. 3. We make rules in our lives, the way we do in games. Write down five rules which you will follow strictly throughout your life.
5.	Social Studies	1. Name some states of India which have a sea coast. also give the following information about them: a) Lifestyle b) Crops grown c) Soil found d) Animals e) Temples f) Geography g) Climate h) Vegetation 2. Make a chart that contains 29 states, along with their capital and language spoken. 3. Write the names of the two states of each where the following crops are produced: a) Rice b) Cotton c) Wheat d) Sugarcane e) Jute f) Spices g) Tea h) Coffee
6.	Computer	1. Draw a computer and its parts on chart paper and write few lines on each. 2. Draw secondary storage devices .Write differences between Primary memory and Secondary

memory.

3. Write a short note on the characteristics of computer.


4. Define hard copy and softcopy.

5. What do you mean by:


- a) Folder b) Screensaver c) Wallpaper d) File

D.O.I.- 20.5.19


Q Walk through the maze and show the trace with the pencil.



Draw and shade them in your art copy.

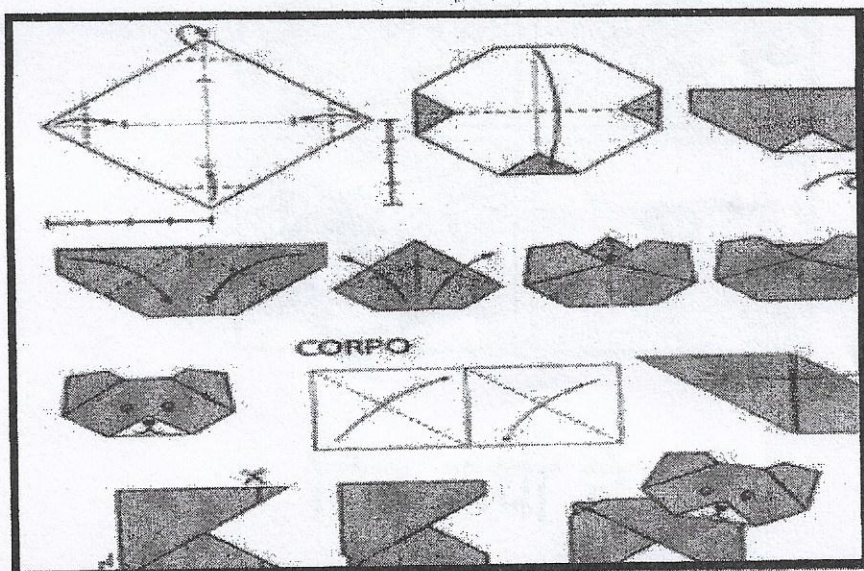


A Sparrow



A Banana



Make a dog with the help of coloured paper and paste it in your scrap book.











































कहानी लेखन

संकेतों के आधार पर 'धनी मनुष्य और नौकर' कहानी शिक्षा सहित लिखिए—
 एक धनी मनुष्य — उसके बहुत से नौकर — एक दिन आभूषणों की
 पेटी का खो जाना — पेटी को ढूँढ़ने के लिए प्रयत्न (कोशिश) — एक
 सपाय का गन में जाना — प्रत्येक नौकर को एक-एक छड़ी देना —
 दोबी की छड़ी का एक इंच लंबी हो जाना — दूसरे दिन नौकरों को छड़ी
 लेकर सपरिवार होने की आज्ञा — चोर नौकर का अपनी छड़ी को एक इंच
 काटकर छोटी कर देना — दूसरे दिन चोर का पकड़ा जाना — शिक्षा —।

Look at the first two figures. Decide how they are related. Find the figure that is related to the third figure in the same way that the first two figures are related. Draw a circle around the figure that completes the analogy.

Example: \rightarrow is like \leftarrow as  is like 

1. 123 is like 321 as abc is like	a. bca b. ABC c. cba
2.  is like  as  is like	a.  b.  c. 
3.  is like  as  is like	a.  b.  c. 
4.  is like  as  is like	a.  b.  c. 
5.  is like  as  is like	a.  b.  c. 
6. o o o is like o o o as    is like	a.   b.   c.  
7.  is like  as  is like	a.  b.  c. 



चित्र कथा लेखन

$256 \times 0 =$

Write the number that comes after 7895.

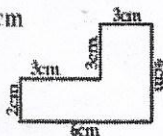
Write the date a week before 15/7/07?

How many days are there in two years? days

The time is 9:10 now. What will the time after 20 minutes?

How many edges are in a cylinder?

Perimeter of the figure = cm



How many faces are there in a sphere?

Odd number \times odd number =

0. What is the cost of 4 text messages at 25 cents each?
\$

11. What is the 8th letter of the alphabet?

$$\frac{2}{5} \frac{6}{5}$$

Put sign > or <

13. How many centimetres make up 7.5 m?

a. 75 m

b. 750 cm

$14. 49000 - 10000 =$

15. Tick the two congruent shapes.



$16. 400 + 200 + 30000 =$

17. How many days are there in August? days



18. Draw hands to show 6:15 am.

$19. 1^2 =$

$20. 1, \times, 2, 1 \times, 3,$

$1. 6 \text{ kg} = \text{ g}$

2. Colour $\frac{1}{4}$ parts of this shape.



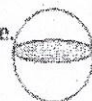
3. Fill in the box with correct digits.

$$2569 = \text{ thousands} + \text{ hundreds} + \text{ tens} + \text{ ones}$$

4. Circle the largest number. 900, 1000, 400, 1200

6. Is it am or pm during sunset?


7. Name this 3D shape. Sp e



8. If you cut pizzas into quarters, how many pieces will you have altogether?



10. What is the cost of buying 3 icecreams at \$40 each?



$11. 3 \text{ l} = \text{ ml}$

12. Write 9574 in words.

13. Write the correct sign > or < 3534 3338

14. What time is it?



15. There are 1200 girls and 1500 boys in a school. What is the total number of students in the school?

16. Is this line vertical or horizontal?



17. How many legs do 5 spiders have? legs



18. How many corners are there in a cube?



19. Which is the third month of the year?

$20. 500, 1000, 1500,$


$2, 4, 6, 10$

$40 \text{ cm} + 10 \text{ cm} = \text{ cm}$

Write the number name for 105.

$4 \times 4 =$

Draw to show two turns anticlockwise.



August						
Sun	Mon	Tue	Wed	Thu	Fri	Sat
	1	2	3	4	5	6
7	8	9	10	11	12	13
14	15	16	17	18	19	20
21	22	23	24	25	26	27
28	29	30	31			

How many days are in August? days

What date is the first Sunday?

Write the dates of all Tuesday.

How many Saturdays are there in August?

0. Which is lighter: a bucket of water or a school chair?



a. bucket of water

b. School chair

c. Similar

11. How many days are there in two weeks? days

12. Draw hands to show 11 o'clock.



$13. 50 - 30 =$

$14. 50 + 5 =$

$15. 10 \times 4 =$

16. Colour the left hand.



17. Mother had 8 chocolates. She gave one each to Mable, June and Sisily. How many chocolates are left with her now?

$18. 7 - 3 =$

19. Circle the smallest and cross out the greatest numeral. 28 75 56 18 81

20. Draw a line so that both sides match.



1. There are 6 glasses on one tray and 11 glasses on another tray. How many glasses are there altogether?

2. 5 more than 90 is.

3. Write in decreasing order. 9 5 2 8

4. How many days are there in two weeks?

$5. \text{Double of } 22 =$

$6. 66 + 10 =$

7. 30 cars are parked. 8 are gray, 4 are red and the remaining are blue. How many blue cars are there?

$8. 80 \div = 10$

$9. 4, 14, 24,$

10. Complete this pattern.



$11. 373 = \text{ hundreds} + \text{ tens} + \text{ ones.}$

12. 3 less than 99 is.

13. Put the sign > or < 101 100

14. If you can eat two icecreams each hour, how many icecreams will you finish in 2 hours?



$15. 25 \div 5 =$

16. How many wheels are there on 9 bicycles?



17. Which month begins with F?


18. Measure this line. cm

19. How many benches are there in your classroom?

$20. 4 \times 40 =$

अनुच्छेद लेखन

दिए गए संकेतों के आधार पर 'समुद्र किनारे की यात्रा' विषय पर अनुच्छेद लिखिए—



स्कूल की छुट्टियाँ — भूख भूखड़ा खाना — बहुत सुंदर नज़ारा —
दूर-दूर तक फैला समुद्र — फोटो खींचना — शोखवाड़ी की सवारी
— पानी के जहाज़ में बैठना — भूखा-भिरना — बड़े-बड़े
खरीदना — खाना-पीना — बहुत मज़ा आना — वापस लौटना।

