

**Tender Souls' Public School**  
Ring Road Awas vikas, Rudrapur  
**Summer Vacation Assignment (2019-20)**  
**Class -V**

Ph. 05944-245778  
97564-97970

Name - \_\_\_\_\_

**Note :- P.T. M to be held on 21.05.09 (Tue) between 10:00 a.m. to 12:30 p.m.**  
**Holiday homework MUST be submitted on 28<sup>th</sup> or 29<sup>th</sup> of June'19.**

**Note:** i) Below homework is to be done in A4-ruled sheets and be filed in the RING BINDER.  
ii) Take the required no. of Xerox of the working sheet(s), if necessary.  
iii) Parents to help and supervise the activity of their ward in furnishing the above homework.  
iv) Summer break falls from 21.05.19 (Tue) to 29.06.19 (sat) .


S.No.	Subject	Assignment
1.	English	1. Make a list of any 20 verbs and write their past and past participle form. 2. Write an essay in about 200 words on the topic "An Interesting Dream" 3. Write a bio-sketch of Nelson Mandela. 4. Write conversation between your mother and you to convince her to allow you to go on one day trip to fun town with your friend. 5. Make a project file on the history of Agra. Write a story about how Agra got its name. 6. Eating a balanced diet during childhood is very important. Write an article in your project file on the topic "Eating junk food leads to Obesity"
2.	Hindi	क) गर्मियों में कौन-कौन से पेय पदार्थ हमारे स्वास्थ्य के लिए आवश्यक होते हैं, उनके बारे में 7 से 8 पक्तियाँ लिखिए। ख) इंटरनेट हमारे जीवन के लिए क्यों आवश्यक हो चुका है, इंटरनेट के कुछ लाभ व हानियाँ 10-10 वाक्यों में बताइए। ग) अनुशासन हमारे जीवन को किस प्रकार से प्रभावित करता है, उसके ऊपर एक निबंध लिखिए। घ) गर्मियों की छुट्टियों में आप कहाँ घूमने जाएंगे उनकी तैयारियों से सम्बंधित सूची किस प्रकार बनाएंगे? ङ) रहीमदास जी के पाँच दोहे अर्थ सहित लिखिए।
3.	Maths	1. Write the prices of the different objects you have purchased in the summer vacation .Make a list ,add all of them and calculate how much did you spent on them during vacations. 2. Write down the cube roots of numbers from 1 to 10 and learn them. 3. Write the largest and smallest number formed by using each of the digits 2,4,6,0,9,1,3 and 7(only once) ,both in standard form and word form.
4.	Science	1. Make a chart on "Taste Buds" 2. Collect information about such animals that have a very strong sense of sight, hearing or smell. Give two examples . 3. People find fun in writing their names on the walls of the monument .Is it correct ?If not, then give reasons for your answer.
5.	Social Studies	1. Make a project report on "Landforms of India". 2. Make a globe with the help of big sized ball and show all continents on it. 3. Paste few pictures of farm tools and write the uses of each. 4. Name all the neighbouring countries of India and give the information about their a) Culture    b) Language Spoken    c) Food habits d) Currency    e) Wildlife    f) Climatic condition 5. What are deserts ? Write a short note to describe the conditions in the desert. Name few creatures that are found in desert.
6.	Computer	1. Make a project report on "Internet". Mention its few advantages and disadvantages. 2. For what purpose Multimedia is used? 3. What is a printer? Name different types of printer and write a short note on each. 4. Write short note on:-




- a) Hard disk   b) Storage devices   c) C.P.U.   d) U.P.S.  
5. Write atleast 10 shortcuts command used in computer.

Walk through the maze and show the trace with the pencil.


D.O.I -21.05.19



Draw and shade them in your art copy.

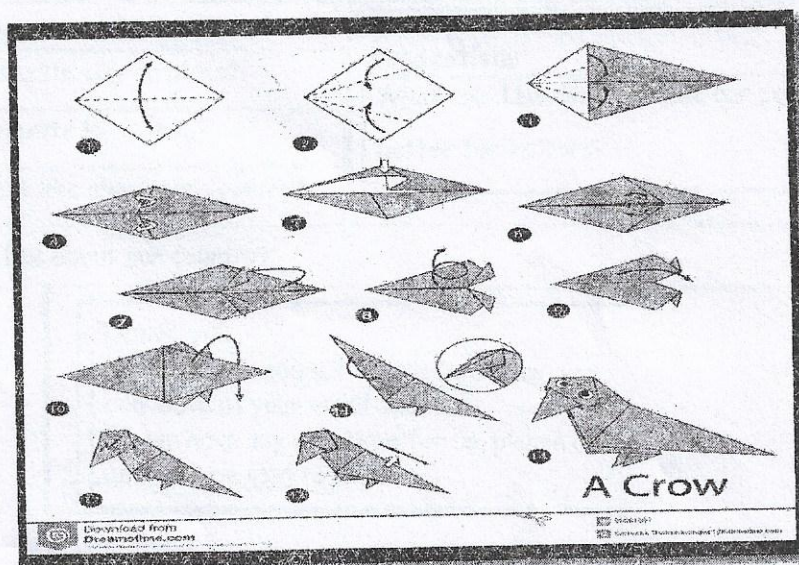


An eagle



An apple

Make a crow with black-coloured paper and paste it in your scrap book.





Introducing: 1. Thing or place : what it might contain or house  
example: fort : soldiers : court : judge

2. Contents : place or thing containing it.  
example: soldier : fort : judge : court

1. vineyard : grape vines ::  
orchard : \_\_\_\_\_  
a. roses  
b. fruit trees  
c. cattle  
d. strawberries

6. barracks : soldiers ::  
stall : \_\_\_\_\_  
a. robins  
b. ants  
c. mountains  
d. antelopes

10. jail : prisoners :: hospital : \_\_\_\_\_  
a. owl  
b. patients  
c. clock  
d. clock

2. hive : bee :: library : \_\_\_\_\_  
a. candy bar  
b. books  
c. book  
d. pencil

7. ship : sailor :: nest : \_\_\_\_\_  
a. cowboy  
b. bluebird  
c. Indian  
d. buffalo

11. flour : pantry :: milk : \_\_\_\_\_  
a. refrigerator  
b. chocolate  
c. water  
d. spoiled

3. nest : bird :: burrow : \_\_\_\_\_  
a. owl  
b. kitten  
c. banana  
d. woodchuck

8. fish : aquarium :: plant : \_\_\_\_\_  
a. green  
b. grow  
c. terrarium  
d. lettuce

12. closet : clothes ::  
breadbox : \_\_\_\_\_  
a. house  
b. money  
c. bread  
d. matches

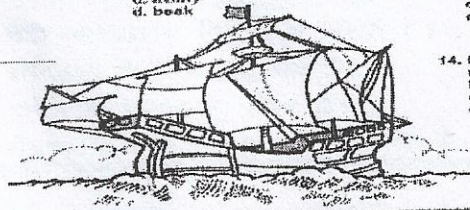
4. papers : desk :: food : \_\_\_\_\_  
a. refrigerator  
b. closet  
c. berry  
d. lettuce

9. bee : apiary :: bird : \_\_\_\_\_  
a. sky  
b. wing  
c. aviary  
d. beak

13. garden : cucumber ::  
crib : \_\_\_\_\_  
a. tomatoes  
b. dog  
c. baby  
d. stroller

5. fire : fireplace :: car : \_\_\_\_\_  
a. tire  
b. mechanic  
c. garage  
d. wreck

14. flower : vase :: water : \_\_\_\_\_  
a. milk  
b. lake  
c. car  
d. bag



### Speaking Worksheet



## Interview with a Foreigner



Hi, could we ask you a few questions? We are English students at the local school and we are doing a survey to practise our English. It will only take five to ten minutes. If you don't mind, we'll also take some photos or record this conversation. Thanks a lot.

#### Personal Information

What's your name?

Where are you from?

What language(s) do you speak?

What's your job?

#### Travel Information

Are you on holiday here?

If so, how long is your trip?

Which parts of our country have you visited?

#### Likes and dislikes

What's your favourite city or place?

What's your favourite local food?

What do you most like about our country?

What don't you like about our country?

#### Suggestions

What could be done to make our country better for visitors?

#### Thank you

To receive feedback on this interview, you can leave us your email address.  
If you have any questions for us, please ask and we'll be glad to answer.



निम्नलिखित वाक्यों में रेखांकित संज्ञा शब्दों के भेद लिखिए।

- क) बुढ़ापे में इन्सान बिल्कुल बच्चा बन जाता है।
- ख) प्रियंका गाँधी और राहुल गाँधी बहन-भाई हैं।
- ग) खिड़की के शीशे टूटे हैं।
- घ) सैनिक लड़ रहे हैं।
- ङ) हिमालय पर्वतों का राजा है।
- च) आकाश में पक्षी उड़ रहे हैं।
- छ) एवरेस्ट की चढ़ाई बहुत कठिन है।
- ज) हाथी मस्त घाल चलता है।
- झ) आज मैं बहुत खुश हूँ।
- ञ) बच्चे बचपन में बहुत चंचल होते हैं।
- ट) कक्षा में बच्चे बैठे हैं।
- ठ) गरीबी बहुत बड़ा अभिशाप है।
- ड) मेरा विद्यालय दिल्ली में स्थित है।
- ण) सब्जियों के दाम बढ़ गए हैं।
- प) करेले में कड़वापन होता है।
- फ) मैदान में कुछ लड़के बात कर रहे हैं।

#### Word Problems Solutions

1. 4 friends are eating personal pan pizzas. Jane has  $\frac{3}{4}$  left, Jill had  $\frac{3}{5}$  left, Cindy has  $\frac{2}{3}$  left and Jeff has  $\frac{2}{5}$  left. Who has the most amount of pizza left? Answer: Jane with  $\frac{3}{4}$  left
2. What is the next number in the following pattern:  
320 160 80 40..... Answer: 20
3. Here are the number of tries your friends took to get a strike when they went bowling:  
1 2 6 6 4 3 5 5 2 6 3  
What's the median number of tries? 4  
What's the mode? 6 What's the mean? 4
4. A spinner is divided into 16 sections. 3 sections are red, 6 are blue, 5 are purple and 2 are orange. If you spin the spinner once, what is the probability that you will land on blue? Answer:  $\frac{6}{16} = \frac{3}{8}$
5. If you leave the tap on at home, 750 quarts will run every 50 seconds. How long will it take for 660 quarts? Answer: 44 seconds.
6. Mount Everest is 29, 028 feet high. Mount Kilimanjaro is 19,340 feet high. How much taller is Mount Everest? Answer: 9688

#### Fraction word problems

- 1) Half a bottle of lemonade is shared between 3 friends. What fraction will each child get?
- 2)  $\frac{3}{5}$  of a chocolate bar is shared between 4 friends. What fraction of the chocolate bar do they each get?
- 3) Three children share  $\frac{4}{5}$  of a pizza. What fraction do they eat?
- 4) Two children share  $\frac{1}{7}$  of a cheesecake. What fraction do they each get?
- 5) Seventeen children share  $\frac{3}{7}$  of a pizza. What fraction do they each eat?
- 6) Nine children share  $\frac{12}{18}$  of a lasagne. What fraction do they each eat?
- 7) A man and his four friends share  $\frac{7}{9}$  of pizza. What fraction will they each eat?
- 8) A woman, her husband and their four children order a Chinese. Between them they equally share  $\frac{5}{7}$  of the food. What fraction of the food do they each get?