

Tender Souls' Public School

Ring Road Awas vikas, Rudrapur

Summer Vacation Assignment (2019-20)

Ph. 05944-245778

97564-97970

Name - _____

Class –VI

Note :- P.T.M to be held on 21.05.09 (Tue) between 10:00 a.m. to 12:30 p.m.
Holiday homework MUST be submitted on 28th or 29th of June'19.


- Note:** i) Below homework is to be done in A4-ruled sheets and be filed in the RING BINDER.
 ii) Take the required no. of Xerox of the working sheet(s), if necessary.
 iii) Parents to help and supervise the activity of their ward in furnishing the above homework.
 iv) Summer break falls from 21.05.19 (Tue) to 29.06.19 (sat) .

S.N o.	Subject	Homework
1.	English	<p>1. Make a poster on "Stop Cruelty towards Animals."</p> <p>2. Make a chart on " Parts Of Speech "</p> <p>3. Share your holidays with us, and write a journal of at least a fortnight of your holidays. You can supplement it with photographs and souvenirs from your trip. E.g: If you visit the beach you can stick shells into your journal or If you had gone to a mountain you can stick a fern or a flower to support your work, even a ticket stub would be nice. Use a small notebook (60 pages) and cover the book with special designs of your choice (think scrap book journaling)..</p> <p>4. Design an English magazine which should have the following requirements:</p> <ul style="list-style-type: none"> i. an attractive cover page ii. name of the magazine iii. an article on " Hygiene". iv. a small story . v. Jokes vi. English Riddles. vii. Advertisements viii. Idioms and Proverbs ix. Differentiate Homonyms ,homophones and Homographs with examples x. Crosswords / puzzles xii. GRAFFITI with a social message xiii. Famous sayings of eminent personalities. <p>5. Make a collage to justify the given topic.</p> <ul style="list-style-type: none"> • Your colony had scarcity of water last week and you could not celebrate your birthday because of it. Write a diary entry in 80-100 words expressing your feelings about the same. • A lot of water can be saved in every household by following a few simple habits like keeping the tap closed while brushing your teeth. Make a poster for your bathroom (to remind yourself and other family members) mentioning at least 5 ways to save water at home.
2.	Hindi	<p>क) कबीर दास जी के कोई 10 दोहे लिखिए।</p> <p>ख) दूषित हो चुके पर्यावरण को बचाने हेतु क्या प्रयास हो सकते हैं, उन पर अपने सुझाव दीजिए।</p> <p>ग) 'स्वच्छता' पर एक अनुच्छेद लिखिए।</p> <p>घ) ग्रीष्मावकाश में भ्रमण हेतु गए हुए स्थान के खट्टे मीठे अनुभवों को एक लेख के माध्यम से बताइए।</p> <p>ङ) आप गर्मियों की छुट्टियों में अपने दादा-दादी या नाना-नानी के घर गए होंगे आपने उनके साथ कैसे वक्त व्यतीत किया उस अनुभव को अपने शब्दों में लिखिए।</p>
3.	Maths	Attached
4.	Science	<p>1. What are the different components of food. Paste the sources of each component of food (in scrapbook).</p> <p>2. Paste the different types of natural and synthetic fibre(in scrapbook) and write the difference.</p> <p>3. How to get jute fabric? Write the process and its uses also.</p> <p>4. What are the harmful effects of excess intake of fat and protein?</p> <p>5. Name the types of pollution. Explain each of them with suitable diagram/picture.</p> <p>6. Make a chart showing different methods to conserve water.</p>


5.	Social Studies	1. Draw the solar system on a chart paper. 2. Make a project file on our Country-India. Take into consideration, the following a) Climate b) Vegetation c) Landforms d) Wildlife 3. Write about these historical monuments of Hyderabad along with the suitable pictures. a) Charminar b) Golkonda Fort
6.	Computer	1. Prepare a list of Input devices being applied in your computer lab and along their pictures. 2. Differentiate between Hardware and Software. 3. Write a short note and paste pictures for the same : a) Charles Babbage b) Herman Hollerith. 4. Write the short note on generation of the computer.

Walk through the maze and show the trace with pencil.

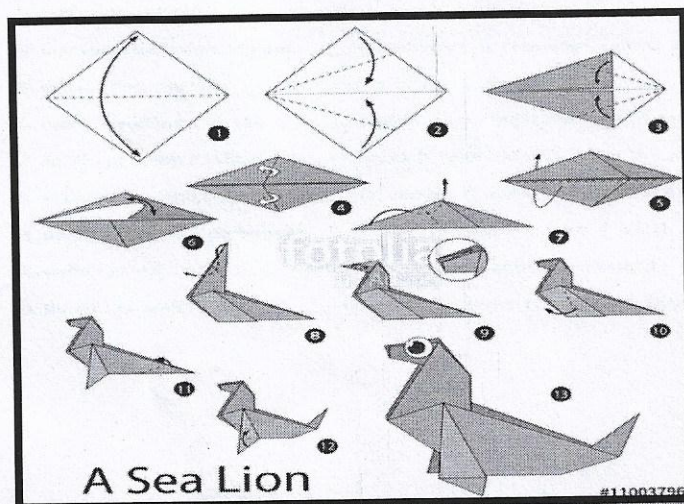
D.O.I -21.05.19



Draw and shade them in your art copy.



Make a Sea Lion with the coloured paper and paste it your scrap book.



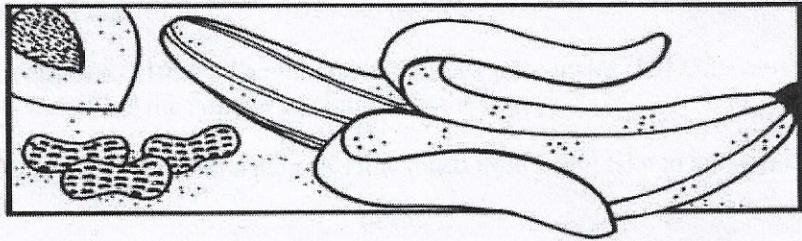
आत्मविश्वास सफलता का प्रतीक है। आत्मविश्वासी व्यक्ति सफलता को अपने पुरुषार्थ से उपार्जित न मानकर ईश्वरीय अनुदान मानता है। आत्मविश्वासी मनुष्य सफलता को अपने ही उपयोग में प्रयुक्त नहीं करता, अपितु औरों में भी बाँटता है। जिस किसी तरह से श्रेय, सफलता, यश सम्मान पाने की प्रवृत्ति उसमें नहीं होती। आत्मविश्वास ऐसी संजीवनी है जो व्यक्तित्व के तीनों पहलुओं चिंतन, चरित्र और व्यवहार को प्रभावित करती है। लक्ष्य के प्रति विश्वास भी हमारी विचार तरंगों को उसी ओर उन्मुख कर देती है। वह लक्ष्य का चयन कर सफलता पाता है। आत्मविश्वास का विकास एवं उपयोग अपने विचारों मान्यताओं के आधार पर होता है। हम जैसा स्वयं को मानेंगे वैसा ही बनते चले जाएँगे। कायरता अथवा प्रखरता में से किसका वर्ण करना है ? आत्मविश्वासी इन दोनों में उच्चतम का वर्ण करता है। वर्ण ही नहीं करता, अपितु उस पर बढ़ता चला जाता है। जिसके पदचिह्न औरों के लिए पाथेय बन जाते हैं ? आत्मशक्ति विकसित करने के लिए हमें दूसरों पर निर्भर नहीं रहना चाहिए। संदेह से दूर रहना चाहिए।

- (i) सफलता के लिए आत्मविश्वास का होना क्यों आवश्यक है ?
- (ii) आत्मविश्वास को संजीवनी क्यों कहा गया है ?
- (iii) विचार आत्मविश्वास को कैसे प्रभावित करता है ?
- (iv) पाथेय से क्या अभिप्राय है ?
- (v) संदेह से दूर रहने के लिए क्यों कहा गया है ?
- (vi) आत्मविश्वासी व्यक्ति द्वारा सफलता को पुरुषार्थ से अर्जित न मानकर ईश्वरीय देन मानना कहाँ तक उचित है ?

action - object

object - action

write : book :: compose : song
 peel : banana :: crack : nut
 bell : ring :: horn : honk
 play : rehearse :: game : practice




1. concert : hear :: drama : ____ (a. eyes b. view c. play d. spectator)
2. maneuver : troops :: dispatch : ____ (a. messenger b. send off c. receive d. speed)
3. sculpt : clay :: manufacture : ____ (a. factory b. manifest c. assemble d. products)
4. inaugurate : officer :: enthrone : ____ (a. office b. royalty c. throne d. commence)
5. study : exam :: pack : ____ (a. test b. unpack c. vacation d. package)
6. preserve : environment :: safeguard : ____ (a. guard b. protect c. rights d. safe)
7. fold : origami :: slice : ____ (a. knife b. pare c. thinly d. cheese)
8. repress : revolution :: foster : ____ (a. patriotism b. encourage c. fossil d. tarnish)
9. salute : flag :: pedal : ____ (a. flutter b. bicycle c. wares d. brake)
10. meet : deadline :: forego : ____ (a. abstain b. meeting c. forewarn d. temptation)
11. solve : problem :: record : ____ (a. round b. write down c. history d. scribe)
12. evidence : weigh :: decision : ____ (a. decisive b. option c. judgement d. reach)
13. pencil : sharpen :: garbage : ____ (a. stinky b. recycle c. trash d. truck)
14. write : pencil :: paint : ____ (a. brush b. picture c. artist d. landscape)
15. throw : ceramics :: weave : ____ (a. mosaics b. twine c. tapestry d. loom)

HOLIDAY ASSIGNMENT

MATHEMATICS

CLASS VI

1. Find the value of $8967 \times 637 + 8967 \times 363$, using the suitable property.
2. Evaluate $8 \times 391 \times 125$, using the suitable property.
3. How many line segments are there in given figure?



4. Draw all the diagonals of a pentagon ABCDE and name them.
5. Draw a quadrilateral PQRS and name all angles.
6. Draw a line segment CD. Further draw a line perpendicular to CD.
7. Draw a triangle XYZ and write it's all angles and sides.
8. Find the sum of the given numbers: 19823, 609, 25, 7408.
9. The difference of two numbers is 174325. If the greater number is 8765432, find the smaller number.
10. Estimate the sum $(267 + 132)$ to the nearest tens.
11. A factory produces 20 bulb each day. How many total bulbs that factory will produce in the month of February 2010?
12. What number must be subtracted from 11010101 to get 2635967?
13. The population of a city is 51210913. Out of which 2305218 were males, 1847525 were females and remaining were children. Find the number of children in the city.
14. A motor pumps 950 liters of water in a minute. How much time will it take to pump out 1396500 liters of water?
15. Evaluate $438 \times 999 + 438$, using the suitable property.
16. 100 chairs and 60 tables were purchased for an office. If each chair costs Rs.100 and each table costs Rs.200. Find the total amount of the bill.
17. A student spends Rs.15 on cake and Rs.25 on lunch every day. Find the amount spent by him in 6 days.
18. Multiply 196 and 55, using distributive law of multiplication over subtraction.
19. The food requirement for a girl is 40 calories per day and for a boy is 60 calories per day. Find the total calorie intake for 2 boys and 3 girls together.
20. The population of a town is 5,17,530, if one out of every fifteen is reported to be illiterate. Find the number of literate persons in the town.